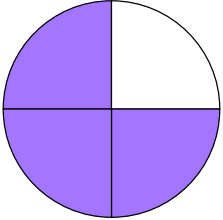


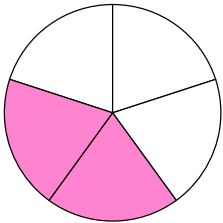
# BASIC FRACTIONS

Draw lines to match the fractions:



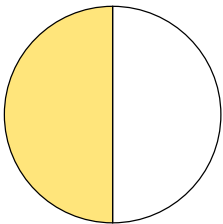
one  
whole

$$\frac{1}{1}$$



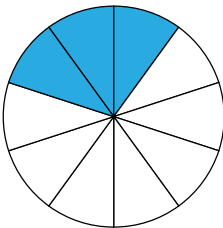
three  
quarters

$$\frac{1}{2}$$



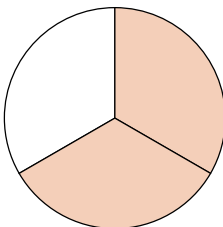
two  
thirds

$$\frac{3}{10}$$




three  
tenths

$$\frac{2}{3}$$



one  
half

$$\frac{2}{5}$$



two  
fifths

$$\frac{3}{4}$$