


NAME: \_\_\_\_\_ DATE: \_\_\_\_\_

# Forms of Energy


Identify the form of energy each image below represents.



\_\_\_\_\_



\_\_\_\_\_



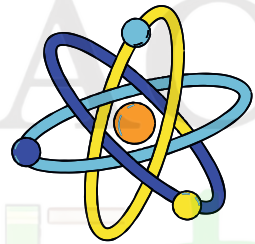
\_\_\_\_\_



\_\_\_\_\_




\_\_\_\_\_




\_\_\_\_\_



\_\_\_\_\_



\_\_\_\_\_



\_\_\_\_\_