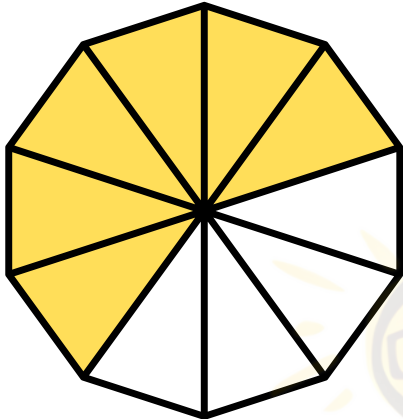


Name: \_\_\_\_\_ Date: \_\_\_\_\_

# Fraction

24

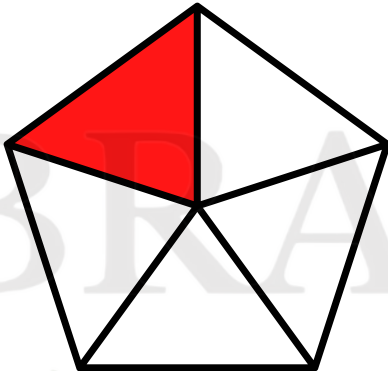
Encircle the correct fraction from the given choices.



$$\frac{4}{9}$$

$$\frac{6}{10}$$

$$\frac{5}{10}$$



$$\frac{1}{5}$$

$$\frac{3}{4}$$


$$\frac{1}{2}$$



$$\frac{2}{4}$$

$$\frac{3}{5}$$

$$\frac{1}{2}$$



$$\frac{2}{3}$$

$$\frac{3}{4}$$

$$\frac{5}{6}$$