











# Dots Addition

Count and add the dots, then write the correct answer.

|   |   |   |                      |   |                      |   |                      |
|---|---|---|----------------------|---|----------------------|---|----------------------|
|    | + |    | <input type="text"/> | + | <input type="text"/> | = | <input type="text"/> |
|    | + |    | <input type="text"/> | + | <input type="text"/> | = | <input type="text"/> |
|  | + |  | <input type="text"/> | + | <input type="text"/> | = | <input type="text"/> |
|  | + |  | <input type="text"/> | + | <input type="text"/> | = | <input type="text"/> |
|  | + |  | <input type="text"/> | + | <input type="text"/> | = | <input type="text"/> |

