
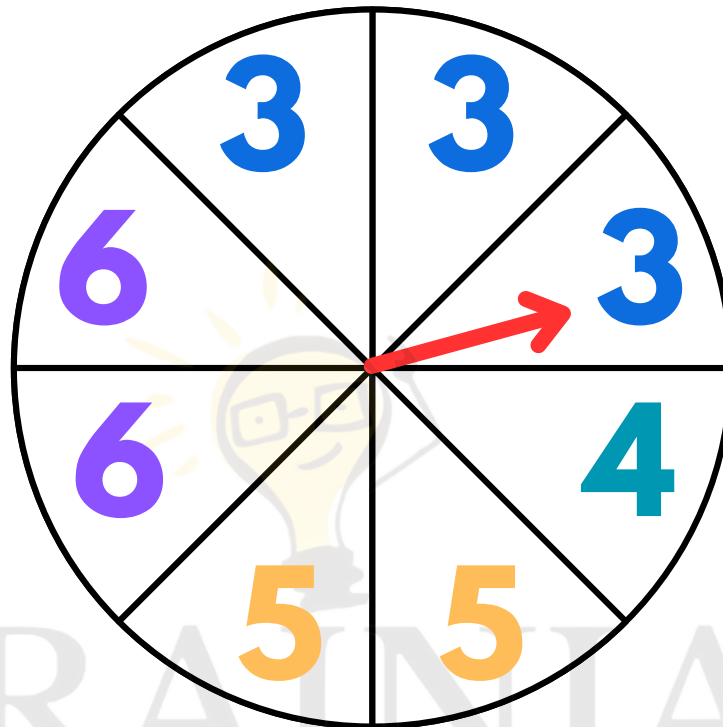



# Fractional Probability

Answer the questions about the spinner below.



1. What is the probability of landing on a four? \_\_\_\_\_
2. What is the probability of landing on a five? \_\_\_\_\_
3. What is the probability of landing on a six? \_\_\_\_\_
4. What is the probability of landing on a two? \_\_\_\_\_
5. What is the probability of landing on an odd number? \_\_\_\_\_
6. What is the probability of landing on a four or less? \_\_\_\_\_
7. What is the probability of not landing on an even number? \_\_\_\_\_
8. Which number is most likely to be spun and why? \_\_\_\_\_