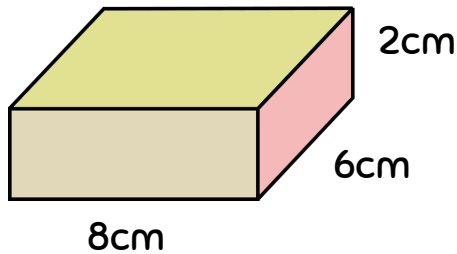


Surface Area: Cuboids

Find the total surface area of the cuboids

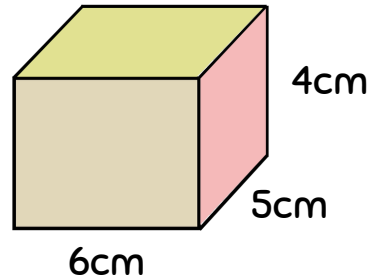


Front + Back = _____

Top + Bottom = _____

LHS + RHS = _____

Total = cm²

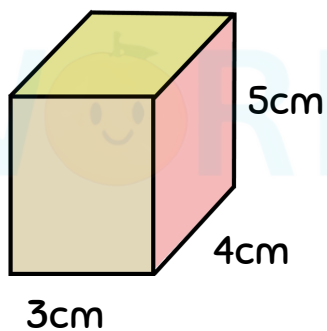


Front + Back = _____

Top + Bottom = _____

LHS + RHS = _____

Total = cm²

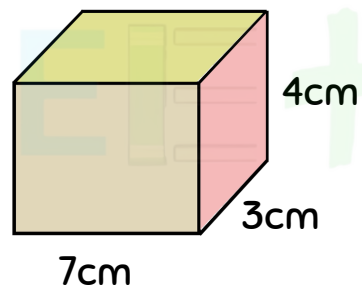


Front + Back = _____

Top + Bottom = _____

LHS + RHS = _____

Total = cm²



Front + Back = _____

Top + Bottom = _____

LHS + RHS = _____

Total = cm²